



ਨਿਰਦੇਸ਼: (ਪ੍ਰਸ਼ਨ 1 ਤੋਂ 26) ਹੇਠ ਦਿੱਤੇ ਗਏ ਪ੍ਰਸ਼ਨਾਂ ਵਿੱਚ ਸ਼ਬਦਾਂ/ਅੰਕਾਂ ਦੀ ਇੱਕ ਲੜੀ ਦਿੱਤੀ ਗਈ ਹੈ, ਜਿਸ ਦੇ ਚਾਰ ਵਿਕਲਪ ਹਨ। ਉਹ ਵਿਕਲਪ ਚੁਣੋ ਜੋ ਦਿੱਤੀ ਗਈ ਲੜੀ ਦਾ ਸ਼ੀਸ਼ੇ ਵਿੱਚ ਦਿਸਣ ਵਾਲਾ ਸਹੀ ਪਰਛਾਵਾਂ ਹੋਵੇ।

- Q 1 WHITE
(a) WHITE (b) WHITE
(c) WHITE (d) WHITE
- Q 2 BRISK
(a) BRISK (b) BRISK
(c) BRISK (d) BRISK
- Q 3 PAINTED
(a) PAINTED (b) PAINTED
(c) PAINTED (d) PAINTED
- Q 4 NATIONAL
(a) NATIONAL (b) NATIONAL
(c) NATIONAL (d) NATIONAL
- Q 5 SUPERVISOR
(a) SUPERVISOR (b) SUPERVISOR
(c) SUPERVISOR (d) SUPERVISOR
- Q 6 JUDGEMENT
(a) JUDGEMENT (b) JUDGEMENT
(c) JUDGEMENT (d) JUDGEMENT
- Q 7 QUALITY
(a) QUALITY (b) QUALITY
(c) QUALITY (d) QUALITY
- Q 8 TERMINATE
(a) TERMINATE (b) TERMINATE
(c) TERMINATE (d) TERMINATE
- Q 9 FIXING
(a) FIXING (b) FIXING
(c) FIXING (d) FIXING
- Q 10 MALAYALAM
(a) MALAYALAM (b) MALAYALAM
(c) MALAYALAM (d) MALAYALAM



- Q 11 GEOGRAPHY
 (a) YHPARGOEG
 (c) GEOGRAPHY
 (b) YHPARGOEG
 (d) GEOGRAPHY
- Q 12 INFORMATIONS
 (a) SNOITAMROFI
 (c) SNOITAMROFI
 (b) SNOITAMROFI
 (d) SNOITAMROFI
- Q 13 REASONING
 (a) GNINOSAR
 (c) GNINOSAR
 (b) GNINOSAR
 (d) GNINOSAR
- Q 14 EFFECTIVE
 (a) EFFECTIVE
 (c) EFFECTIVE
 (b) EFFECTIVE
 (d) EFFECTIVE
- Q 15 MAGAZINE
 (a) ENIZAM
 (c) ENIZAM
 (b) ENIZAM
 (d) ENIZAM
- Q 16 ANS43Q12
 (a) AN24Q12
 (c) AN24Q12
 (b) AN24Q12
 (d) AN24Q12
- Q 17 DL9CG4728
 (a) 8274G9LD
 (c) DL9CG4728
 (b) DL9CG4728
 (d) DL9CG4728
- Q 18 BR4AQ16HI
 (a) BR4AQ16HI
 (c) BR4AQ16HI
 (b) BR4AQ16HI
 (d) BR4AQ16HI
- Q 19 HK9YFTU
 (a) UTZYFKH
 (c) UTZYFKH
 (b) UTZYFKH
 (d) UTZYFKH
- Q 20 TARA1014A
 (a) A1014IARAT
 (c) A1014IARAT
 (b) A1014IARAT
 (d) A1014IARAT
- Q 21 1965INDOPAK
 (a) 1965INDOPAK
 (c) 1965INDOPAK
 (b) 1965INDOPAK
 (d) 1965INDOPAK
- Q 22 AN54WMG3
 (a) AN54WMG3
 (c) AN54WMG3
 (b) AN54WMG3
 (d) AN54WMG3



- Q 23* 247596
 (a) 695742
 (c) 247298
 (b) 982742
 (d) 247298
- Q 24 qutubgarh
 (a) putudgrah
 (c) hragbutuq
 (b) dnfnpdrp
 (d) hragbutup
- Q 25 Nu56p7uR
 (a) Nu20q7uR
 (c) Ru7q02uN
 (b) Ru7q02uN
 (d) Ru7d92uN
- Q 26 Which of the following collections of letters will look the same in the mirror ?
 (a) OSMIHOM
 (c) HIMOSTA
 (b) VHRTRVH
 (d) AOVIVOA

ਨਿਰਦੇਸ਼: (ਪ੍ਰਸ਼ਨ 27 ਤੋਂ 50) ਹੇਠ ਦਿੱਤੇ ਗਏ ਪ੍ਰਸ਼ਨਾਂ ਵਿੱਚ ਸ਼ਬਦਾਂ/ਅੰਕਾਂ ਦੀ ਇੱਕ ਲੜੀ ਦਿੱਤੀ ਗਈ ਹੈ, ਜਿਸ ਦੇ ਚਾਰ ਵਿਕਲਪ ਹਨ। ਉਹ ਵਿਕਲਪ ਚੁਣੋ ਜੋ ਦਿੱਤੀ ਗਈ ਲੜੀ ਦਾ ਪਾਣੀ ਵਿੱਚ ਦਿਸਣ ਵਾਲਾ ਸਹੀ ਪਰਛਾਵਾਂ ਹੋਵੇ।

- Q 27 DISC
 (a) CSID
 (c) DISC
 (b) CSID
 (d) DISC
- Q 28 FROG
 (a) FROG
 (c) FROG
 (b) GORF
 (d) FROG
- Q 29 RECRUIT
 (a) RECRUIT
 (c) RECRUIT
 (b) RECRUIT
 (d) RECRUIT
- Q 30 ACOUSTIC
 (a) ACOUSTIC
 (c) ACOUSTIC
 (b) ACOUSTIC
 (d) ACOUSTIC
- Q 31 FAMILY
 (a) FAMILY
 (c) FAMILY
 (b) FAMILY
 (d) FAMILY
- Q 32 NUCLEAR
 (a) NUCLEAR
 (c) NUCLEAR
 (b) NUCLEAR
 (d) NUCLEAR
- Q 33 QUARREL
 (a) QUARREL
 (c) QUARREL
 (b) QUARREL
 (d) QUARREL



- Q 34 U4P15B7
(a) U4P15B7
(b) U4P15B7
(c) U4P15B7
(d) U4P15B7
- Q 35 PQ8AF5BZ9
(a) PQ8AF5BZ9
(b) PQ8AF5BZ9
(c) PQ8AF5BZ9
(d) PQ8AF5BZ9
- Q 36 D6Z7F4
(a) D6Z7F4
(b) D6Z7F4
(c) D6Z7F4
(d) D6Z7F4
- Q 37 VAYU8436
(a) VAYU8436
(b) VAYU8436
(c) VAYU8436
(d) VAYU8436
- Q 38 BK50RP62
(a) BK50RP62
(b) BK50RP62
(c) BK50RP62
(d) BK50RP62
- Q 39 96FSH52
(a) 96FSH52
(b) 96FSH52
(c) 96FSH52
(d) 96FSH52
- Q 40 RAJ589D8
(a) RAJ589D8
(b) RAJ589D8
(c) RAJ589D8
(d) RAJ589D8
- Q 41 GR98AP76ES
(a) GR98AP76ES
(b) GR98AP76ES
(c) GR98AP76ES
(d) GR98AP76ES
- Q 42 US91Q4M5W3
(a) US91Q4M5W3
(b) US91Q4M5W3
(c) US91Q4M5W3
(d) US91Q4M5W3
- Q 43 monday
(a) yadnom
(b) yadnom
(c) yadnom
(d) yadnom



Q 44

rise

(a) lize

(c) rize

(b) esir

(d) esir

Q 45

wrote

(a) wote

(c) wote

(b) wote

(d) wote

Q 46

bridge

(a) bridg

(c) bridg

(b) bridg

(d) bridg

Q 47

N4tQj3

(a) N4tQj3

(c) N4tQj3

(b) N4tQj3

(d) N4tQj3

Q 48

NhRqSy

(a) NhRqSy

(c) NhRqSy

(b) NhRqSy

(d) NhRqSy

Q 49

A1M3b

(a) A1M3b

(c) A1M3b

(b) A1M3b

(d) A1M3b

Q 50

E8t4e9C

(a) E8t4e9C

(c) E8t4e9C


(b) E8t4e9C

(d) E8t4e9C

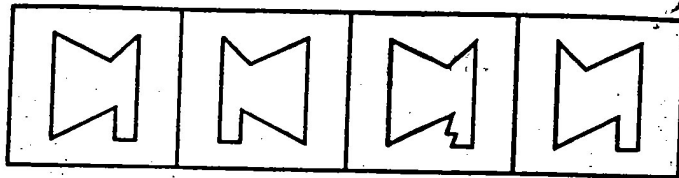


ਨਿਰਦੇਸ਼: (ਪ੍ਰਸ਼ਨ 51 ਤੋਂ 65) ਨਿਮਨ ਦਿੱਤੇ ਗਏ ਪ੍ਰਸ਼ਨਾਂ ਵਿੱਚ ਦਿੱਤੇ ਗਏ ਚਿੱਤਰ x ਦਾ ਸ਼ੀਸ਼ੇ ਵਿੱਚ ਦਿਸਣ ਵਾਲਾ ਸਹੀ ਪ੍ਰਛਾਂਵਾ ਵਿਕੱਲਪਾ (a), (b), (c) ਅਤੇ (d) ਵਿਚੋਂ ਚੁਣੋ ।

Q 51



(X)




(a)

(b)

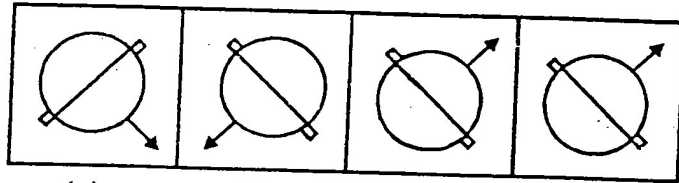
(c)

(d)

Q 52



(X)



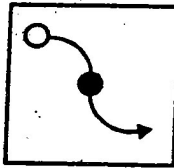
(a)

(b)

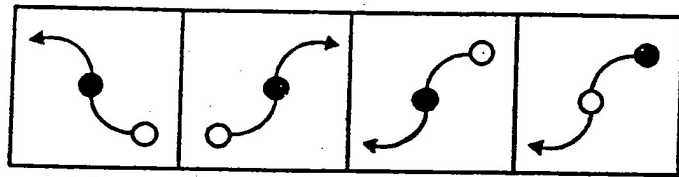
(c)

(d)

Q 53



(X)



(a)

(b)


(c)

(d)

Q 54



(X)



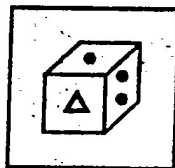
(a)

(b)

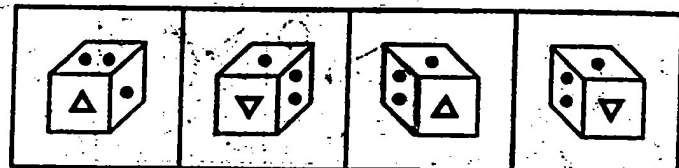
(c)

(d)

55



(X)




(a)

(b)

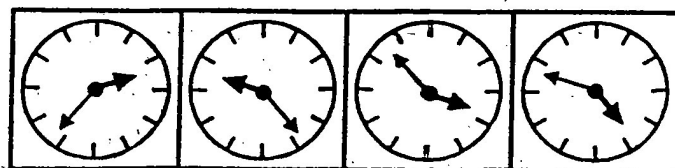
(c)

(d)

Q 56



(X)



(a)

(b)

(c)


(d)



Q 57




(X)

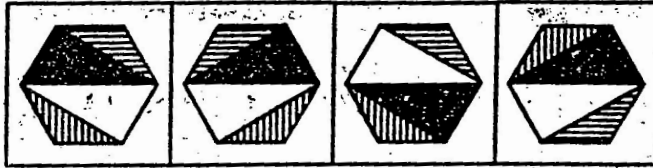


(a) (b) (c) (d)

Q 58

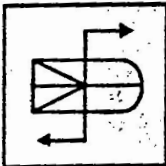


(X)

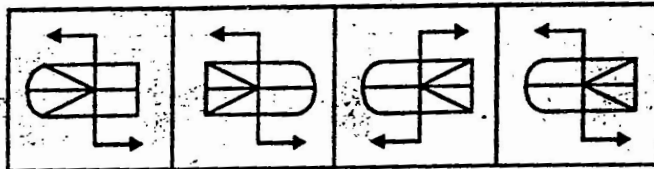


(a) (b) (c) (d)

Q 59




(X)

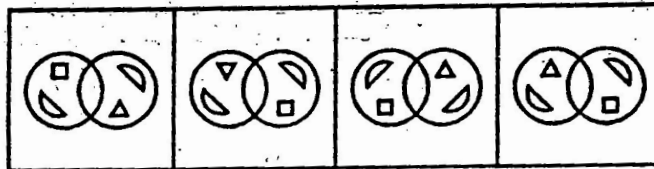


(a) (b) (c) (d)

Q 60




(X)




(a) (b) (c) (d)

Q 61




(X)

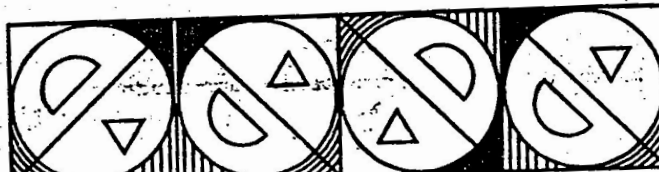


(a) (b) (c) (d)

Q 62




(X)



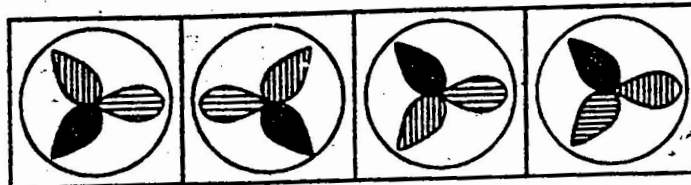
(a) (b) (c) (d)



Q 63



(X)



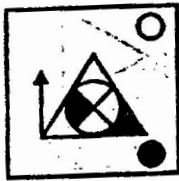
(a)

(b)

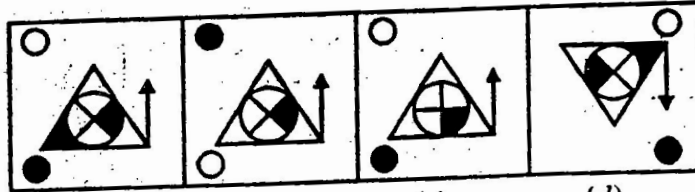
(c)

(d)

Q 64



(X)



(a)

(b)

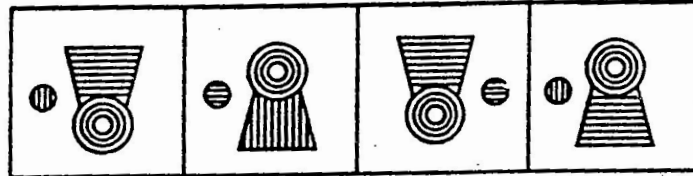
(c)

(d)

Q 65



(X)



(a)

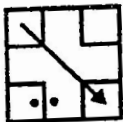
(b)

(c)

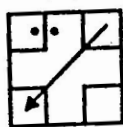
(d)

ਨਿਰਦੇਸ਼: (ਪ੍ਰਸ਼ਨ 66 ਤੋਂ 80) ਨਿਮਨ ਦਿੱਤੇ ਗਏ ਚਿੱਤਰ (x) ਦਾ ਪਾਣੀ ਵਿੱਚ ਦਿਸਣ ਵਾਲਾ ਸਹੀ ਪਰਛਾਵਾਂ ਵਿਕਲਪਾਂ (a), (b), (c) ਅਤੇ (d) ਵਿੱਚੋਂ ਚੁਣੋ ।

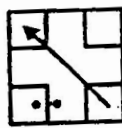
Q 66



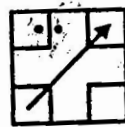
(X)



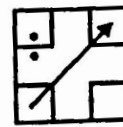
(a)



(b)



(c)



(d)

Q 67



(X)



(a)



(b)



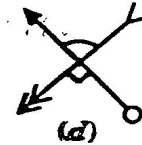
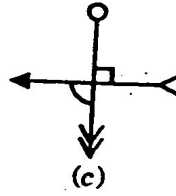
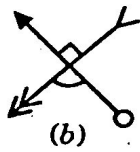
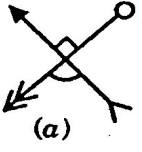
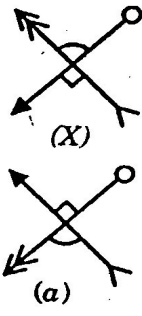
(c)



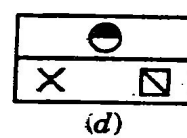
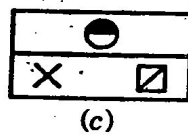
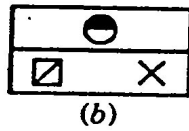
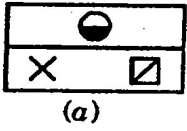
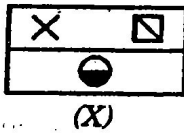
(d)



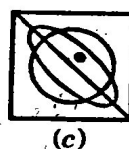
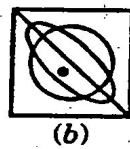
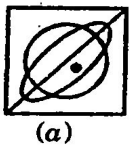
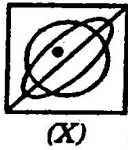
Q 68



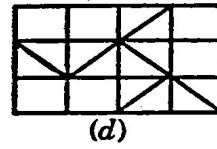
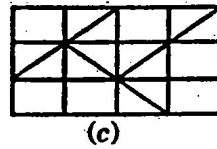
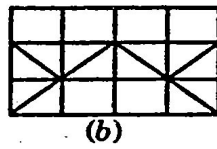
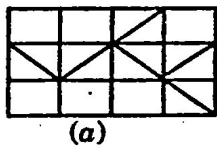
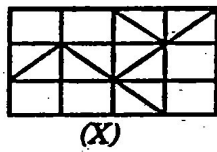
Q 69



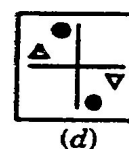
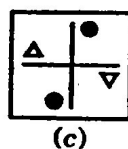
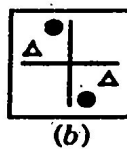
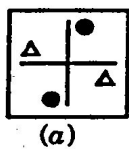
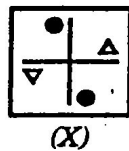
Q 70



Q 71

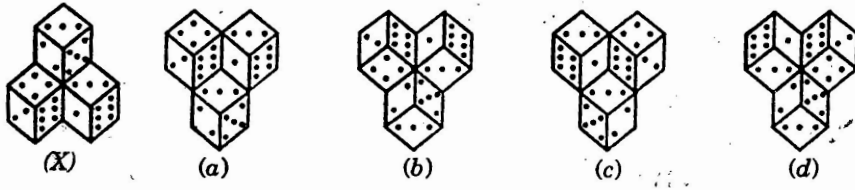


Q 72

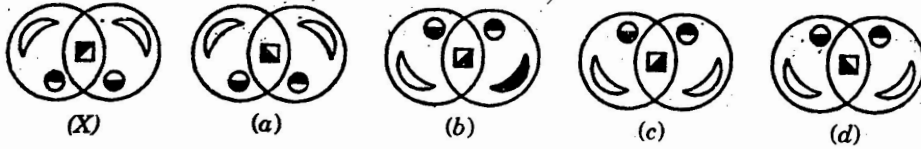




Q 73



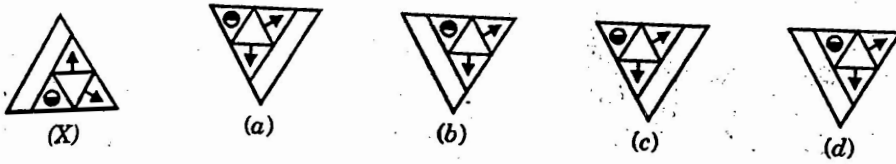
Q 74



Q 75



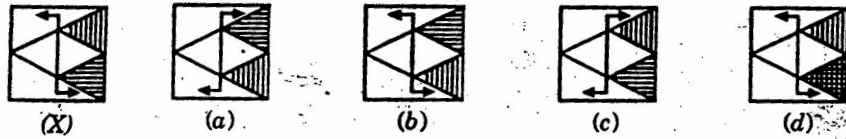
Q 76



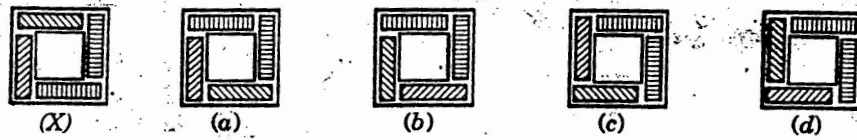
Q 77



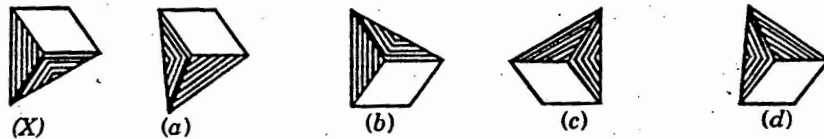
Q 78



Q 79



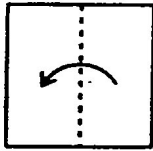
Q 80



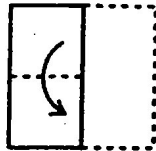


ਨਿਰਦੇਸ਼: (ਪ੍ਰਸ਼ਨ 81 ਤੋਂ 99) ਨਿਮਨ ਦਿੱਤੇ ਗਏ ਪ੍ਰਸ਼ਨਾਂ ਵਿੱਚ ਤਿੰਨ ਚਿੱਤਰ x, y ਅਤੇ z ਦੀ ਇੱਕ ਲੜੀ ਦਿੱਤੀ ਗਈ ਹੈ ਜੋ ਕਾਰਜ ਦੇ ਟੁਕੜੇ ਨੂੰ ਇੱਕ ਖਾਸ ਤਰਤੀਬ ਵਿੱਚ ਮੋੜ ਕੇ ਬਣਾਈ ਗਈ ਹੈ। ਚਿੱਤਰ z ਵਿੱਚ ਇਹ ਵਿਖਾਇਆ ਗਿਆ ਹੈ ਕਿ ਮੁੜੇ ਹੋਏ ਕਾਰਜ ਦੇ ਟੁਕੜੇ ਨੂੰ ਕਿਸ ਤਰ੍ਹਾਂ ਕੱਟਿਆ ਗਿਆ ਹੈ। ਕੱਟੇ ਗਏ ਕਾਰਜ ਨੂੰ ਖੋਲਣ ਤੇ ਇਹ ਦਿੱਤੇ ਵਿਕਲਪਾਂ (A, B, C & D) ਵਿਚੋਂ ਕਿਸ ਤਰ੍ਹਾਂ ਦਾ ਦਿਖੇਗਾ।

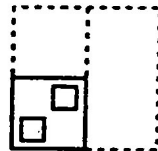
Q 81



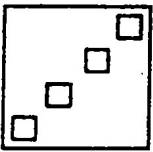
X



Y



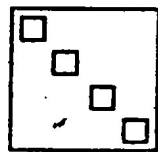
Z



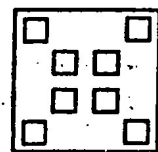
A



B

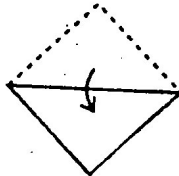


C

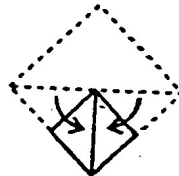


D

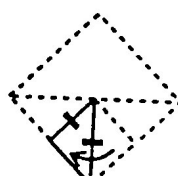
Q 82



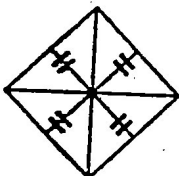
X



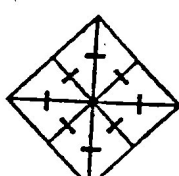
Y



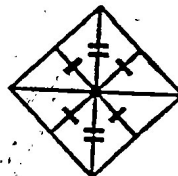
Z



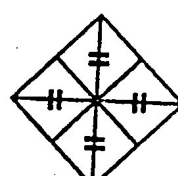
A



B

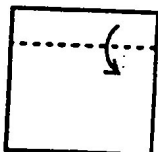


C

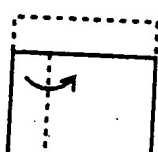


D

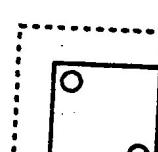
Q 83



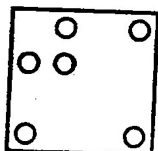
X



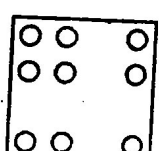
Y



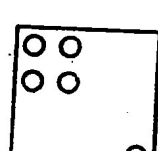
Z



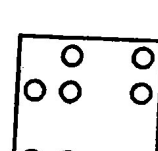
A



B



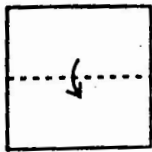
C



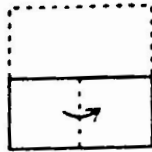
D



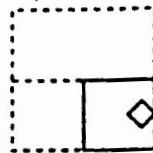
Q 84



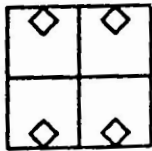
X



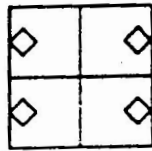
Y




Z



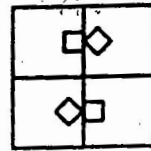
A



B

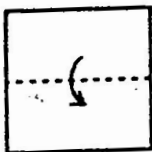


C

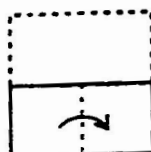


D

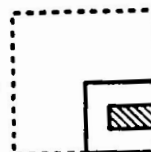
Q 85



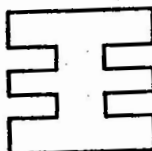
X



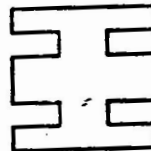
Y



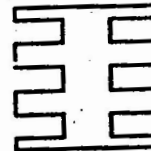
Z



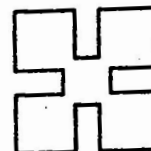
A



B

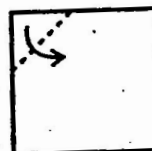


C

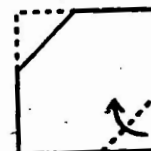


D

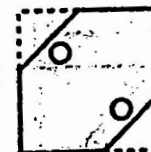
Q 86



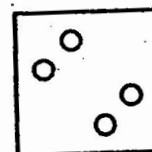
X



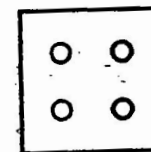
Y



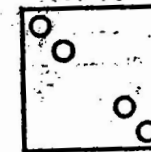
Z



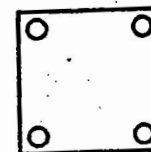
A



B

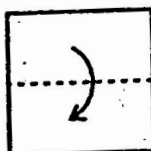


C

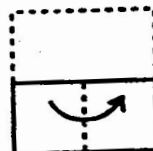


D

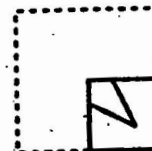
Q 87




X



Y



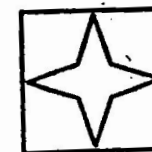
Z




A



B



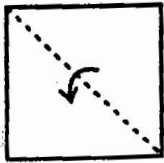
C



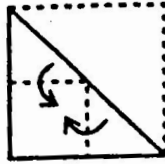
D



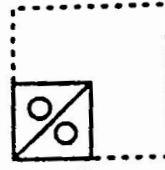
Q 88



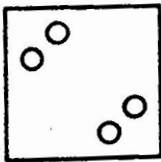
X



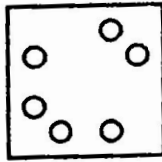
Y



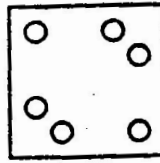
Z



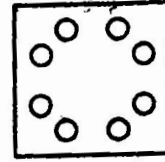
A



B



C

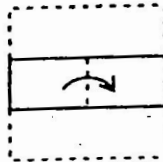


D

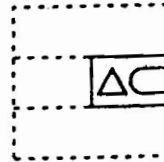
Q 89



X



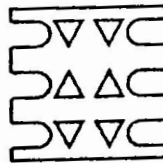
Y



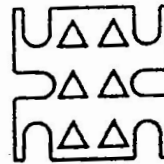
Z



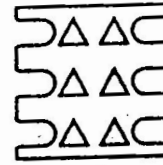
A



B



C

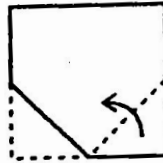


D

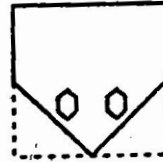
Q 90



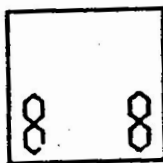
X



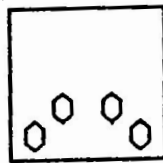
Y



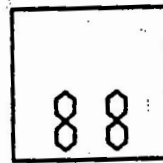
Z



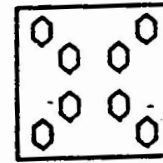
A



B

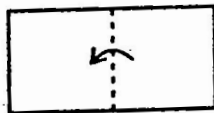


C



D

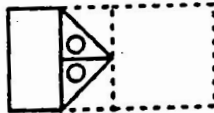
Q 91



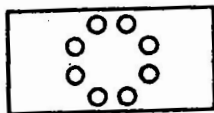
X



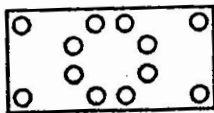
Y



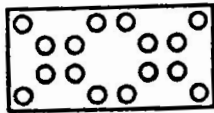
Z



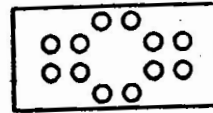
A



B



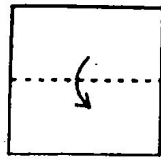
C



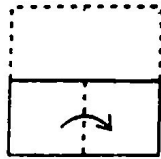
D



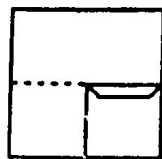
Q 92



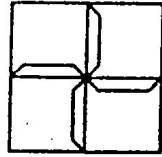
X



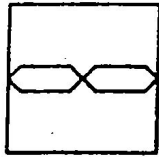
Y



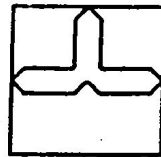
Z



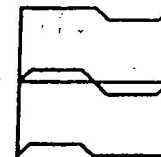
A



B

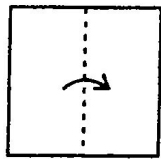


C

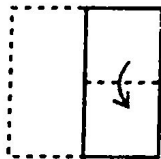


D

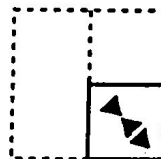
Q 93




X




Y




Z




A



B

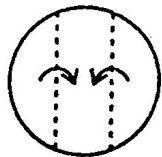


C




D

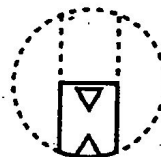
Q 94




X




Y




Z



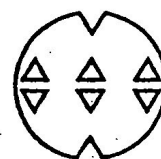
A



B

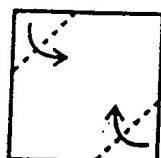


C

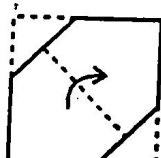


D

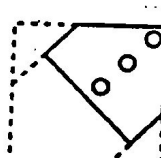
Q 95



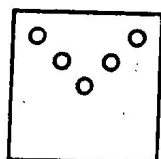
X



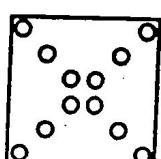
Y



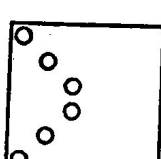
Z



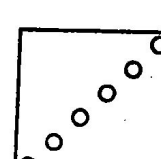
A



B



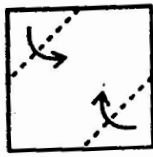
C



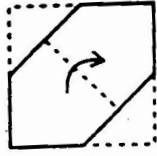
D



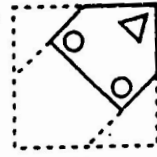
Q 96



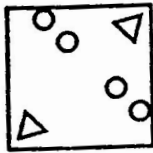
X



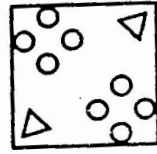
Y




Z




A



B




C

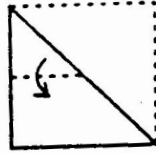


D

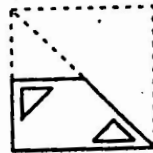
Q 97



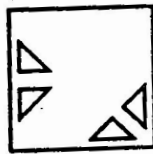
X




Y




Z




A



B

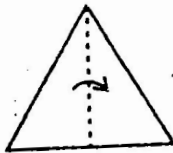


C

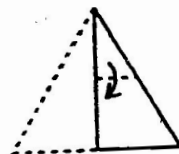


D

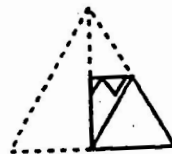
Q 98



X



Y



Z



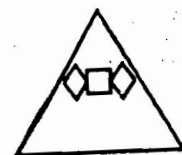
A



B

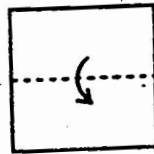


C




D

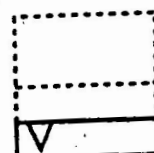
Q 99




X



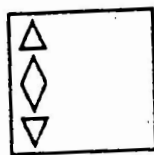
Y



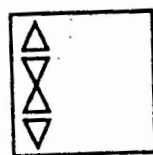
Z



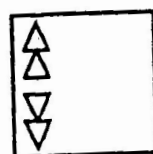
A



B



C



D

**ਉੱਤਰ ਕ੍ਰਮੀ (ਮੈਟਲ ਅਥਿਲਟੀ)-2**

1	c	12	c	23	d	34	c	45	c	56	d	67	d	78	a	89	b
2	d	13	b	24	d	35	d	46	b	57	d	68	b	79	d	90	b
3	b	14	a	25	c	36	c	47	a	58	d	69	c	80	b	91	a
4	b	15	d	26	d	37	b	48	d	59	d	70	b	81	d	92	b
5	a	16	b	27	c	38	b	49	c	60	b	71	d	82	b	93	c
6	c	17	c	28	a	39	c	50	d	61	a	72	c	83	c	94	d
7	c	18	a	29	b	40	a	51	d	62	d	73	b	84	b	95	d
8	c	19	d	30	b	41	c	52	c	63	c	74	d	85	b	96	b
9	d	20	d	31	d	42	d	53	c	64	a	75	c	86	c	97	c
10	b	21	d	32	d	43	d	54	d	65	d	76	b	87	b	98	a
11	a	22	b	33	a	44	a	55	c	66	c	77	d	88	d	99	a